



# Principal's Chat

Primary Academy  
10/21/2020 @10:30am

A decorative border of autumn leaves and acorns surrounds the central text. The leaves are in various shades of yellow, orange, red, and brown, with some showing green veins. There are several acorns scattered throughout, including one with a cluster of red berries. The background is white.

# Welcome!

1. **Unity Day:** *Being Upstanders!*
2. **Parent-Teacher Conferences via Zoom:** *Have you signed up?*
3. **Reopening and Food Distribution:** *Phase 1*
4. **Virtual Bulletin Boards:** *A walk through “The Village!”*

The background of the slide is a dark brown color, framed by a decorative border of autumn-themed elements. The border includes various types of leaves in shades of yellow, orange, red, and brown, as well as clusters of small red berries and several acorns. The central text is presented on a white rectangular background.

# 1.Unity Day

K-12 Virtual Assembly @2pm

*Together...even when we are apart!*

friendship Bully free zone!  
 Love one another! bullying is bad!

Report bullying  
 Be Compassionate  
 Be Polite  
 Be Nice  
 Be A Bully!

We are in this together!

**Bullying**

Be Respectful  
 Be Polite  
 Be Nice  
 Be A Bully!

don't back up to a bully!  
 Bully back!  
 Word hunt  
 think before you speak!

NO Bullying

be kind to others

Help

Share

Smile

be Polite

Zamana

HAPPY

SAD

The slide features a decorative border of autumn-themed elements including various colored leaves (yellow, orange, red, brown), acorns, and clusters of red berries. The background is a solid dark brown color.

## 2. Parent-Teacher Conferences

Via Zoom October 29th 8:40am-2:40pm, October 30th 8am-12pm

*Have you signed up for/confirmed a time with your child(ren)'s teacher(s)?*

A decorative border of autumn leaves and acorns surrounds the central text. The leaves are in various colors including yellow, orange, red, and brown. There are several acorns scattered throughout the border.

## **Conferences are an opportunity to discuss:**

- 1st Quarter Standards and Skills
- STAR Reports
- Student Attendance and Participation during distanced instruction
- Upcoming K-12 Project Days, November 1 - 3rd
- Bus Information for Phase 1 (available via Parent Portal by October 29th)

The background is a dark reddish-brown color, decorated with various autumn-themed elements. There are several large, colorful leaves in shades of yellow, orange, red, and brown, scattered around the edges. Some leaves are whole, while others are partially cut off. There are also several acorns and clusters of small red berries, likely holly or hawthorn, interspersed among the leaves. The overall composition is festive and seasonal.

# 3. Reopening and Food Distribution

*Phase 1: Updates*

## Phase 1: Reopening

### Dates for our Anticipated Reopening:

Thursday, November  
5th: K-5 Grade

Monday, November  
16th: 6-8th Grade

Monday, November  
30th: 9-11th Grade

### Hybrid Schedule:

Teachers will be working with both students in-person and those receiving instruction virtually on Mondays, Tuesdays, Thursdays and Fridays. Wednesdays is distanced instruction for all students.

### Phase 1

- Masks are mandatory
- Daily temperatures and monitoring for symptoms
- Plexiglass barriers
- Social distancing
- No playground equipment
- No outside visitors to the building

**\*There will be additional parent webinars prior to November 5th**





## Food Distribution

### Monday, November 2nd

- *At the High School from 8:30 – 11:00am for the week of Nov. 2 – 6th*
- *Distribution will remain on **Mondays** beginning the week of Nov. 2nd*

### Phase 1: In-person

- *M/T/Th/F individually prepared and packaged breakfasts and lunches will be delivered to the classrooms*
- *Tuesdays: Students will bring home a sack breakfast and lunch for Wednesday*

The slide features a decorative border of autumn-themed elements including various colored leaves (yellow, orange, red, green), acorns, and clusters of red berries, set against a dark brown background. The main content is on a white rectangular area.

## 4. Virtual Bulletin Boards

*A walk around “The Village”*

Farm Kittens

Many kittens are born each summer at the Sunshine Farm. The table shows the number of kittens born at the farm from June to August.

Number of Kittens Born

June	July	August
13	8	7

1. During which two months were a total of 20 kittens born?

June and August are the two months the kittens were born in

2. Write an equation to find the total number of kittens born in July and August. Then solve the equation.

$$8+7=15$$

Farm Kittens 2

Use the clues to complete the table below.

- a. No kittens were born in December, January, and February
- b. In March, 6 kittens were born.
- c. Three kittens were born in April and September.
- d. In May, 4 kittens were born.
- e. Two kittens were born in October and in November.

Kittens Born at the Sunshine Farm

Season	Months	Number of Kittens Born
Spring	March, April, May	13
Summer	June, July, August	28
Fall	Sept., Oct., Nov.	7
Winter	Dec., Jan., Feb.	0


2. Joy says more kittens were born in the summer than in all other seasons combined. Is she correct? Explain.

Yes. Because  $13+7+0=20$

3. How many more kittens were born in the spring than the fall? Show how to solve the problem with a subtraction equation.

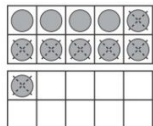
6 more.  $13-7=6$

Show our work to explain. Yes or No disagree, because there us 13 in June and 7 in August




to subtract.

$$11 - 7 = 4$$




$$16 - 9 = 7$$

$$14 - 6 = 8$$



$$18 - 10 = 8$$

$$12 - 5 = 7$$



$$13 - 7 = 6$$



# 2nd Grade

## 3 Things I Learned


1. Cinco de Mayo means the 5th of may in spanish
2. The french took over mexico city for 4 years
3. Calavera means skull in spanish

## 2 things I Liked

1. Cinco de mayo is a big fiesta
2. Piñatas are full of candy

## 1 Question

1. Why did the french want the land Mexicans were on?



Pete wont eat  
Author: Emily Arnold McCully

1. Pete's mom made food for him and his brother, the food is slop.

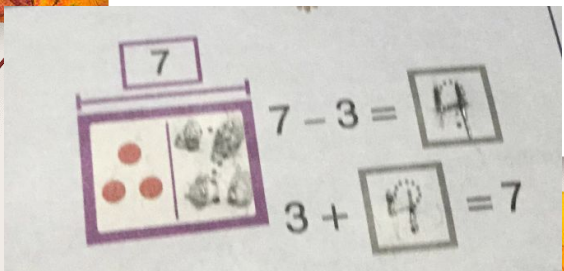

2. Pete does not want to eat slop and his mom said to him you have to eat it.

3. Pete's brother went outside and Pete had to stay inside because he did not want to eat.

4. Pete wanted to go outside but he had to eat, mom said is it getting late, she started to cries and said I am a mean mom.

Mommy pig made a sandwich for Pete and he like it, his mom said we dont need...





# 1st Grade

**Finding Missing Parts of Numbers 6 to 9**

Find the missing parts. Then write the numbers.

1. 6 bones in all.  $3 + \text{?} = 6$   
part I know missing part

2. 6 bones in all.  $2 + \text{?} = 6$   
part I know missing part

3. 7 bones in all.  $5 + \text{?} = 7$   
part I know missing part

4.  $8 = 6 + \text{?}$   
part I know missing part

5.  $9 = 5 + \text{?}$   
part I know missing part

6.  $8 = 7 + \text{?}$   
part I know missing part

Find the missing part. Then complete the addition equation.

7. Mark has 9 bagels. He cooks 4 of them. How many bagels are **NOT** cooked?  
 $4 + \text{?} = 9$

8. Hanna has 7 eggs. 5 eggs hatched. How many eggs are **NOT** hatched?  
 $5 + \text{?} = 7$

## Sound words

Mia

Grade 1 Science Worksheet

Fill in the blanks with words from the word bank.

low	high	soft
loud	shakes	sounds

When something shakes very fast, we say it vibrates.

When something vibrates, it often makes sounds.



## How Sound is Made

Name: \_\_\_\_\_

Directions: Use what you have learned about sound to complete the sentences below.

### Word Bank



- Sound** is made by vibrations.
- Vibrations happen when something moves **Back and forth** quickly.
- Sound **Waves** travel through the air.
- When sound waves are fast the sound has **High pitch**.
- When sound waves are slow, the sound has **Low pitch**.

What are three ways you can make sound?


Guitar	Water fall	Drum
--------	------------	------

# 1                      # 2                      # 3

## Loud and soft sounds



Grade 1 Science Worksheet

For each picture, write an L if the sound is loud or an S if the sound is soft. Cross out any pictures that don't make any sound.



# NUMBER MAZE 3

Can you help this rubber ducky take a bath? Draw a path from the rubber ducky to the bath tub by counting from 1 to 10 and tracing the numbers.

	8	4	6	5
	10	2	3	4
3	1	5	1	8
1	2	3	6	7
4	6	4	5	
5	2	9	2	

# My Family Traditions

Name: Devin

What are your family traditions?

Draw in at least three boxes.

Write your tradition on the line.



Food	Clothing
<p>Eggrolls and tamales</p> 	 <p>Ao dai</p>
Holidays	Entertainment (games, dances, songs)
 <p>Lunar new year and Dia de los muertos</p>	

# Kindergarten

ALL ABOUT

Isaac

I am 5 years old

My birthday is 04.24.20

When I grow up I want to be a studio's child

My favorite foods are:


- eggs
- fries
- Soup
- Chicken nugget

Family Portrait



of my family

I like to go to the park



Trace the Sentence

Name: ALEXA TORRES Date: Oct-16-20  
 Directions: Read each sentence. Then trace each sentence.

- I can run. 
- I can sing. 
- I can play. 
- I can walk. 
- I can read. 





# Thank You!

## Q&A

[awashingto@allenvillageschool.com](mailto:awashingto@allenvillageschool.com)